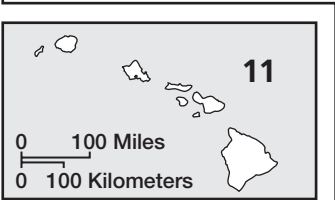
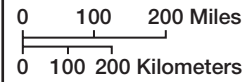
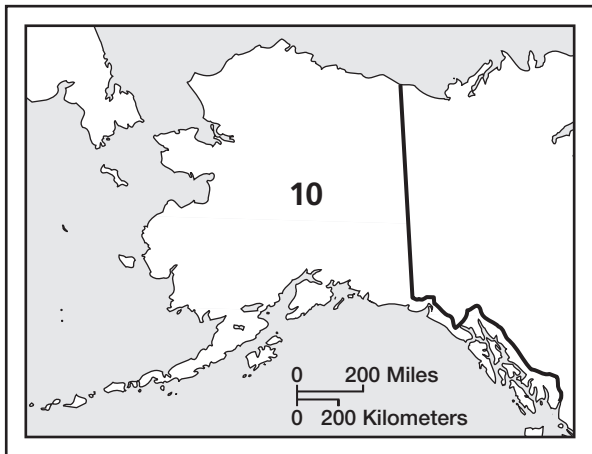


Know Your States

Directions: Look at the map of the numbered states on a separate sheet. Write below the name of the state that matches the number on the map.

- | | |
|-----------|-----------|
| 1. _____ | 26. _____ |
| 2. _____ | 27. _____ |
| 3. _____ | 28. _____ |
| 4. _____ | 29. _____ |
| 5. _____ | 30. _____ |
| 6. _____ | 31. _____ |
| 7. _____ | 32. _____ |
| 8. _____ | 33. _____ |
| 9. _____ | 34. _____ |
| 10. _____ | 35. _____ |
| 11. _____ | 36. _____ |
| 12. _____ | 37. _____ |
| 13. _____ | 38. _____ |
| 14. _____ | 39. _____ |
| 15. _____ | 40. _____ |
| 16. _____ | 41. _____ |
| 17. _____ | 42. _____ |
| 18. _____ | 43. _____ |
| 19. _____ | 44. _____ |
| 20. _____ | 45. _____ |
| 21. _____ | 46. _____ |
| 22. _____ | 47. _____ |
| 23. _____ | 48. _____ |
| 24. _____ | 49. _____ |
| 25. _____ | 50. _____ |



Know Your States

Directions: Look at the map of the numbered states on a separate sheet. Write below the name of the state that matches the number on the map.

- | | |
|-------------------------|---------------------------|
| 1. <u>Washington</u> | 26. <u>Indiana</u> |
| 2. <u>Oregon</u> | 27. <u>Ohio</u> |
| 3. <u>California</u> | 28. <u>Maine</u> |
| 4. <u>Nevada</u> | 29. <u>New Hampshire</u> |
| 5. <u>Idaho</u> | 30. <u>Vermont</u> |
| 6. <u>Utah</u> | 31. <u>Massachusetts</u> |
| 7. <u>Montana</u> | 32. <u>Rhode Island</u> |
| 8. <u>Wyoming</u> | 33. <u>Connecticut</u> |
| 9. <u>Colorado</u> | 34. <u>New York</u> |
| 10. <u>Alaska</u> | 35. <u>New Jersey</u> |
| 11. <u>Hawaii</u> | 36. <u>Pennsylvania</u> |
| 12. <u>Arizona</u> | 37. <u>Delaware</u> |
| 13. <u>New Mexico</u> | 38. <u>Maryland</u> |
| 14. <u>Oklahoma</u> | 39. <u>Arkansas</u> |
| 15. <u>Texas</u> | 40. <u>Louisiana</u> |
| 16. <u>North Dakota</u> | 41. <u>Kentucky</u> |
| 17. <u>South Dakota</u> | 42. <u>Tennessee</u> |
| 18. <u>Nebraska</u> | 43. <u>Mississippi</u> |
| 19. <u>Kansas</u> | 44. <u>Alabama</u> |
| 20. <u>Minnesota</u> | 45. <u>West Virginia</u> |
| 21. <u>Iowa</u> | 46. <u>Virginia</u> |
| 22. <u>Missouri</u> | 47. <u>North Carolina</u> |
| 23. <u>Wisconsin</u> | 48. <u>South Carolina</u> |
| 24. <u>Illinois</u> | 49. <u>Georgia</u> |
| 25. <u>Michigan</u> | 50. <u>Florida</u> |